

Compare angles

1 Here are some angles.

a) Circle the angle that is greater than a right angle.



b) Circle the angle that is less than 90 degrees.



2 Draw three different angles that are less than a right angle.

Compare answers with a partner.

Complete the sentence.

These are all examples of _____ angles.



3 Draw two different obtuse angles.

Compare answers with a partner.


Complete the sentence.

Obtuse angles are greater than degrees

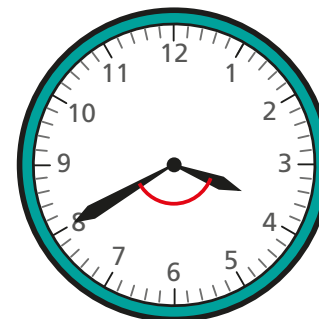
but less than degrees.

4 Is the angle between the hands of the clock acute or obtuse?

a)

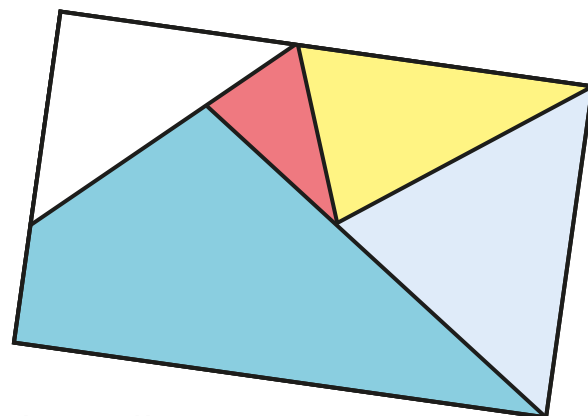


b)

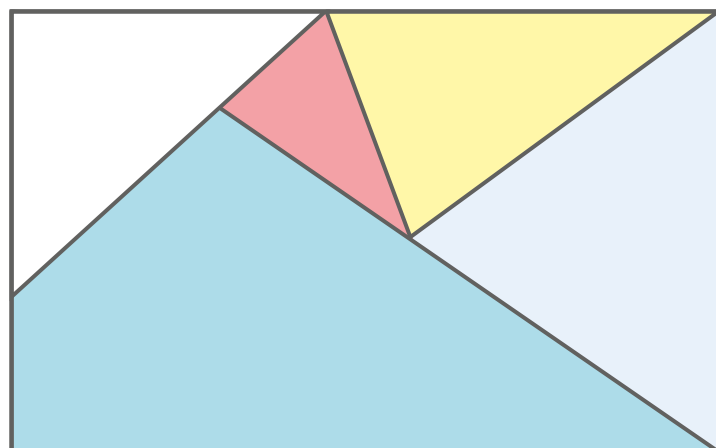




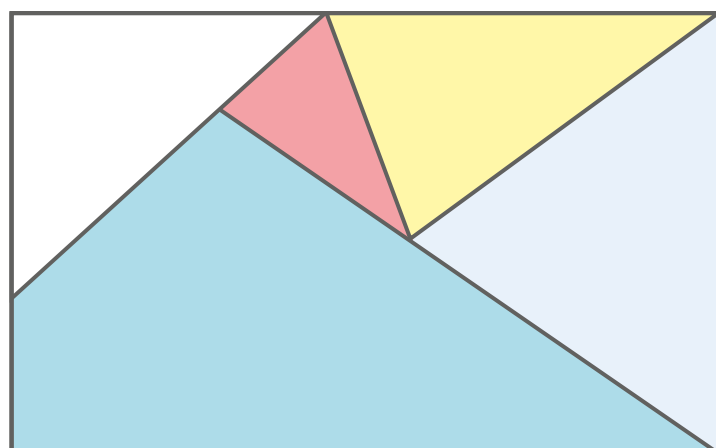
5 Here is a piece of wallpaper.



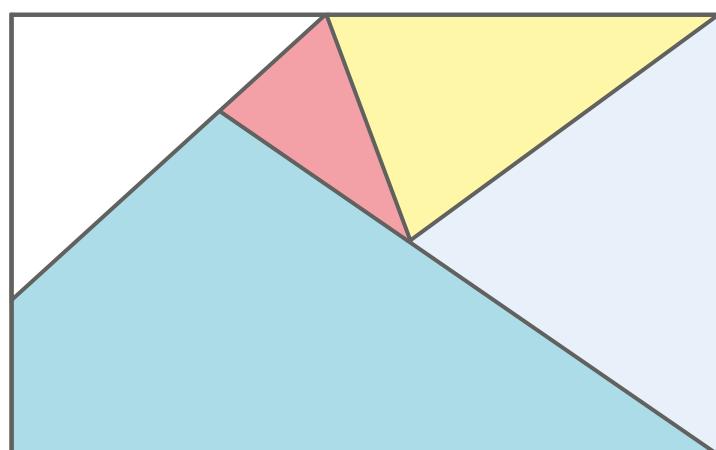
a) Mark two right angles on the wallpaper.



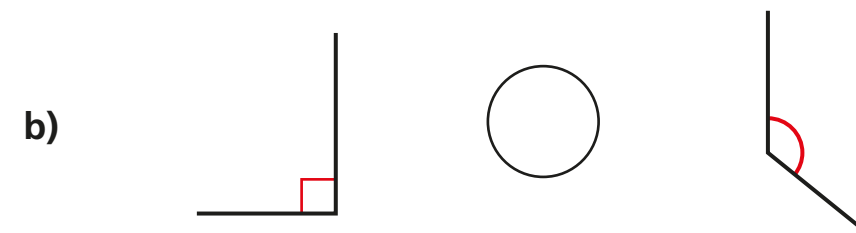
b) Mark four acute angles on the wallpaper.



c) Mark two obtuse angles on the wallpaper.



6 Write $<$, $>$ or $=$ to compare the sizes of the angles.



7 Draw a shape that has one right angle, two acute angles and one obtuse angle.



Compare answers with a partner.

What is the same and what is different about your shapes?

